

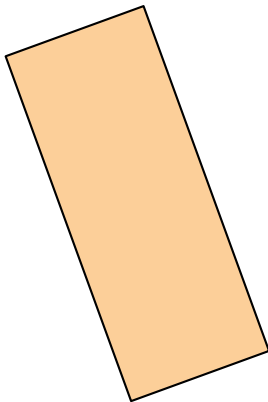

# Worksheet: Rectangles




Q1: Select another rectangle.



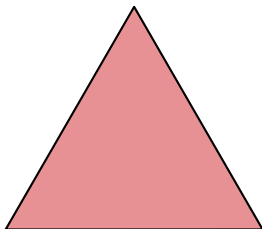
Question Video



A



B



C

Q2: Let's think about rectangles!

▶ This shape has 5 sides. Is it a rectangle?



A yes

B no


▶ This shape has 4 sides. Is it a rectangle?



A no

B yes

▶ This shape has 4 sides. One of the sides is curved. Is it a rectangle?



A yes

B no

▶ This shape has 4 sides. The corners are not the same. Is it a rectangle?



A yes

B no

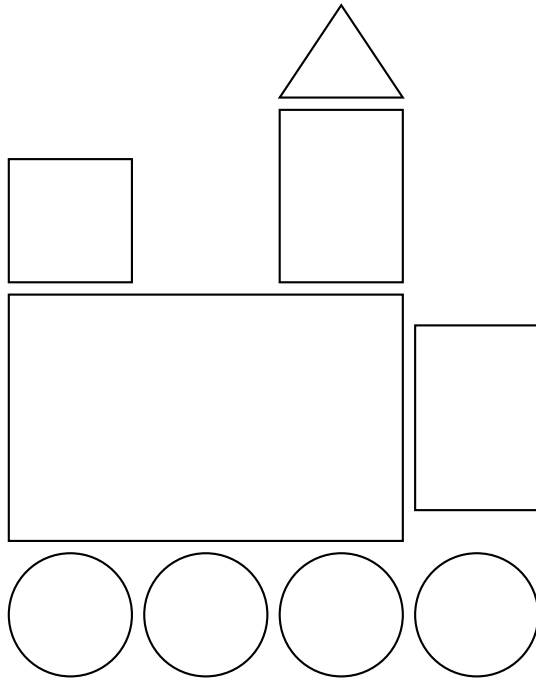
▶ This is a square. Is it also a rectangle?



A no


B yes

**Q3:** How many rectangles are in this picture?



- A 4
- B 3
- C 2


**Q4:** Is this a rectangle?




- A no
- B yes

**Q5:** Choose the rectangle.

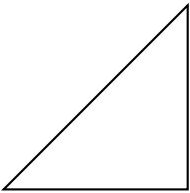
A



B



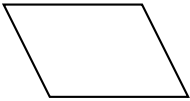
C



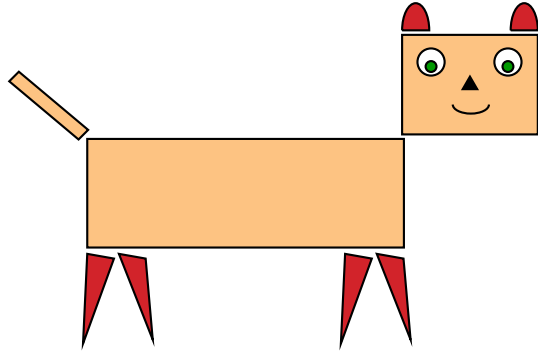
D



E

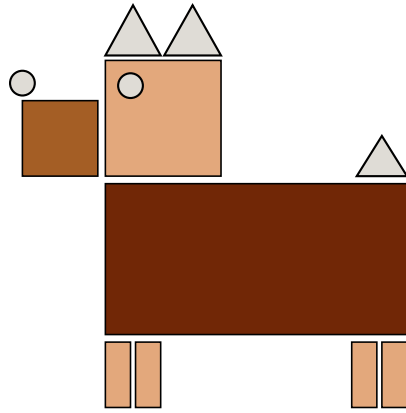


Q6: How many rectangles are there?




- A 2
- B 3
- C 6

Q7: How many rectangles are there?



- A 2
- B 5
- C 3
- D 7

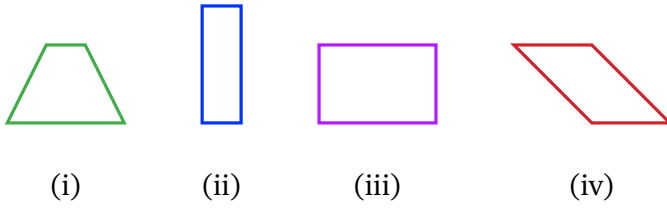
**Q8:** What is the name of this shape?



- A star
- B rectangle
- C square
- D triangle
- E circle

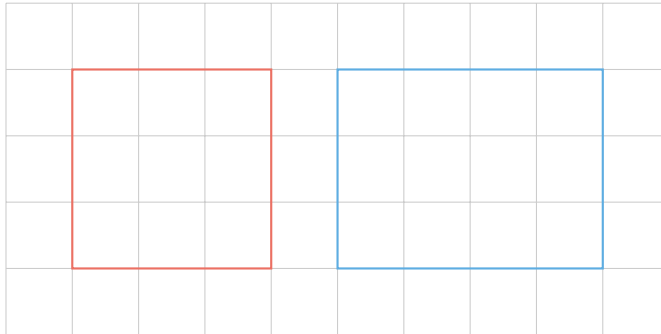


**Q9:** Which TWO of the following shapes are rectangles?



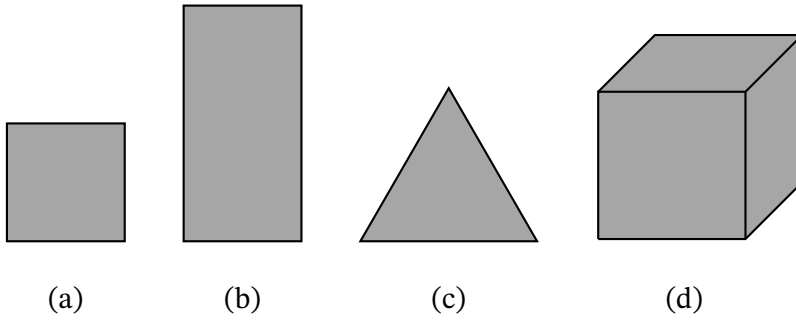
- A shape (i) and shape (iii)
- B shape (iii) and shape (iv)
- C shape (ii) and shape (i)
- D shape (ii) and shape (iii)
- E shape (iv) and shape (ii)

**Q10:** What is the name of the blue shape?



- A rectangle
- B triangle
- C square

**Q11:** Which of the following figures is a rectangle?



- A (d)
- B (a)
- C (b)
- D (c)