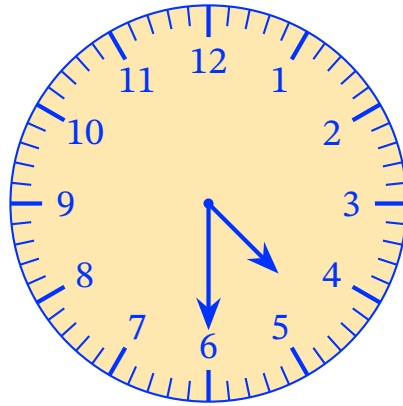


Worksheet: Telling Time in Words: Time to the Half Hour



Q1: What time is shown on the clock?



A half past 4

B half past 6


C half past 5

D half past 3

Q2: What time is it?
Find the missing number.



Question Video




It is half past ____.

- A 9
- B 8
- C 6

Q3: Natalie is playing in the park after school.



What time is it?



A It is half past 4 in the afternoon.

B It is half past 4 in the morning.

C It is half past 5 in the afternoon.