


Worksheet: Counting by Fives up to 120



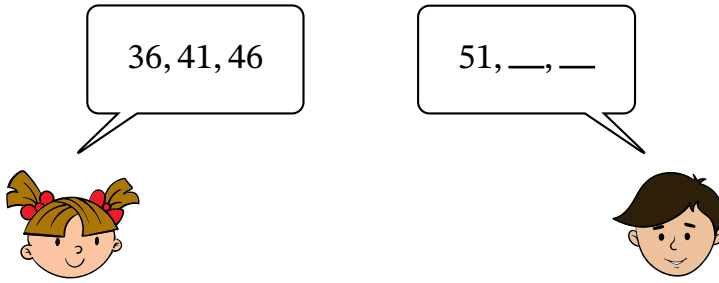
Q1: Skip count by 5s to find the total.

Hint : Remember you do not need to count in ones.



- A 3
- B 15
- C 25
- D 10


Q2: Jennifer and Ethan are skip counting by 5s.



Which 2 numbers should Ethan say next?

- A 61, 71
- B 56, 61
- C 52, 53

Q3: A class are skip counting.



Question Video

► What number should Charlotte say?

?



A 71

B 70

C 74

► What number should Noah say?

?



A 85

B 80

C 84

Q4: Here are 3 number tracks.

39	44	49	54	59	64
----	----	----	----	----	----

261	266	271	276	281	286
-----	-----	-----	-----	-----	-----

974	979	984	989	994	999
-----	-----	-----	-----	-----	-----

► What is the skip counting pattern that **all** the tracks follow?

- A Skip counting by 1
- B Skip counting by 5
- C Skip counting by 50
- D Skip counting by 10

► Explain how you know that.

- A They all follow a repeating pattern. The ones digit increases by one each time.
- B They all follow a repeating pattern. The ones digits alternates between two numbers.
- C They all follow a repeating pattern. The tens digit increases by one each time.