

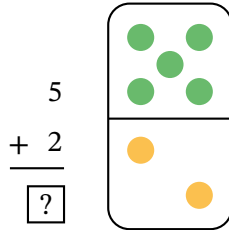
Worksheet: Vertical Addition



Q1: Add to find the missing number.



Question Video



- A 8
- B 6
- C 7

Q2: Add 4 to 7.



Question Video

$$\begin{array}{r} 7 \\ + 4 \\ \hline \end{array}$$

- A 8
- B 11
- C 10
- D 3
- E 12

Q3: Find the answer.



Question Video

$$\begin{array}{r} 6 \\ + 3 \\ \hline ? \end{array}$$

- A 8
- B 11
- C 9
- D 10
- E 7

Q4: Find the answer.

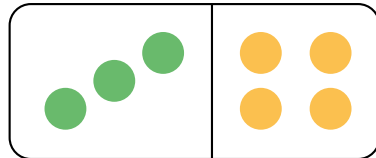
$$\begin{array}{r} 11 \\ + 8 \\ \hline ?? \end{array}$$

- A 19
- B 20
- C 21
- D 17
- E 18

Q5: We can write addition sentences in two ways.

► Add from left to right.

Find the total number of dots.



$$3 + 4 = ?$$

- A 8
- B 7
- C 6

► Add down.

Find the total number of dots.

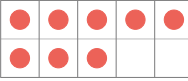
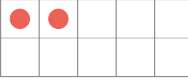
$$\begin{array}{r} 3 \\ + 4 \\ \hline ? \end{array}$$

A 8

B 7

C 6

Q6: Find the missing number.

$$\begin{array}{r} 8 \\ + 2 \\ \hline ? \end{array}$$



A 10

B 8

C 9