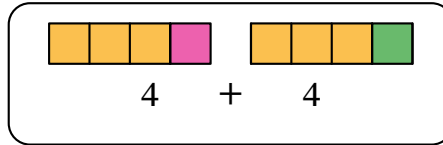
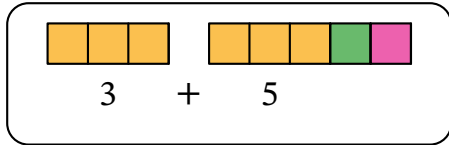


Worksheet: Doubles Plus Two



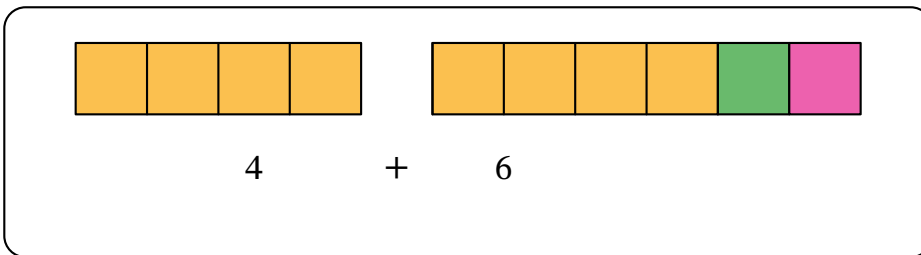
Q1: True or False: Double 4 is the same as $3 + 5$.



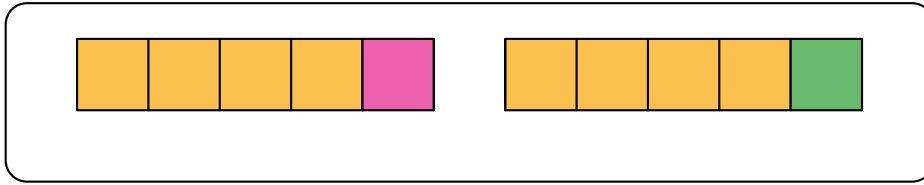
A False

B True

Q2: Natalie knows she can use double facts to find 4 plus 6.



► Find the missing number: $4 + 6$ is the same as double ____.

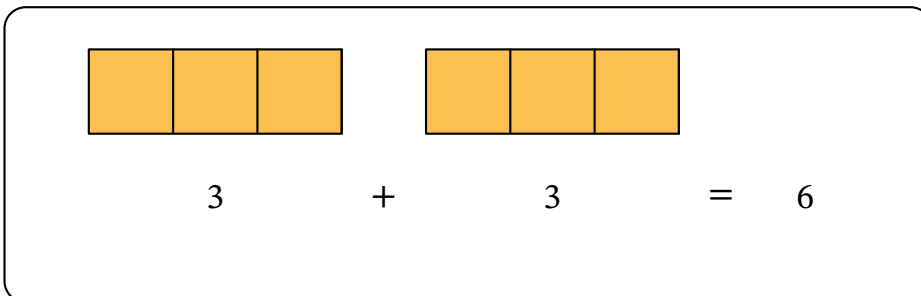


- A 5
- B 4
- C 10

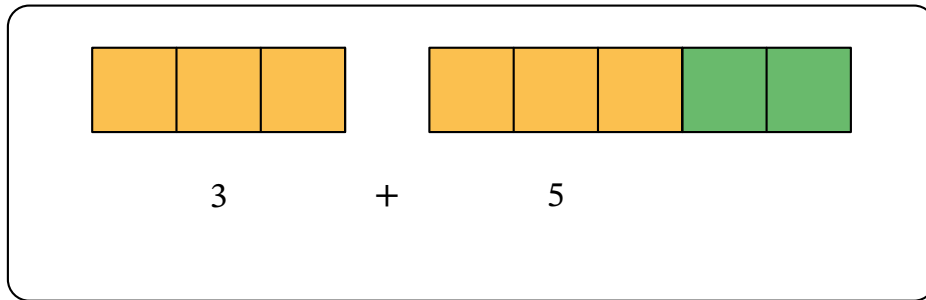
► What is $4 + 6$?

- A 10
- B 46
- C 2

Q3: Noah is using doubles facts to add. Double 3 is 6.



► He can use $3 + 3$ to help him find $3 + 5$.



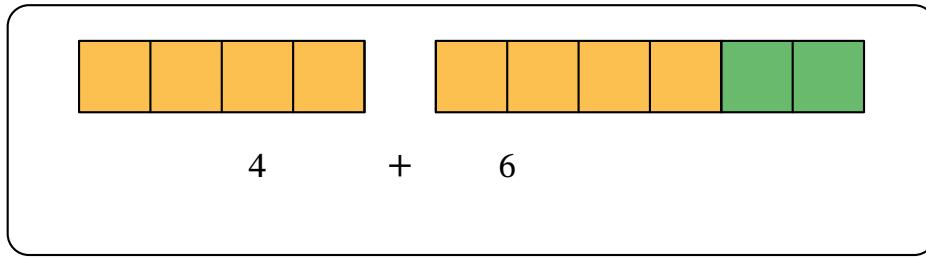
Find the missing number: $3 + 5$ is 6 and ___ more.

- A 1
- B 2
- C 3

► What is $3 + 5$?

- A 2
- B 8
- C 15

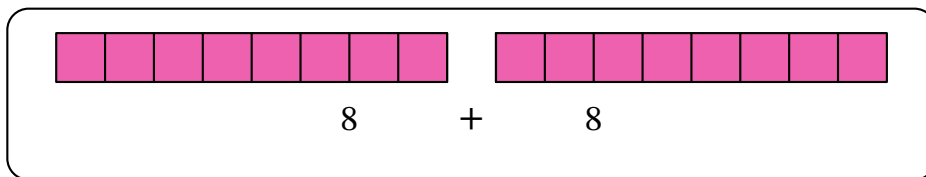
Q4: True or False: $4 + 6$ is 2 more than double 6.



- A False
- B True

Q5: We can use doubles facts to help us add.

▶ What is double 8?



- A 16
- B 88
- C 17

► Use the doubles fact to find $7 + 9$.

A 16

B 79

C 14