

# Worksheet: Adding Two-Digit Numbers with Regrouping



Q1:  $32 + 51 = \underline{\quad}$ .

A 32

B 81

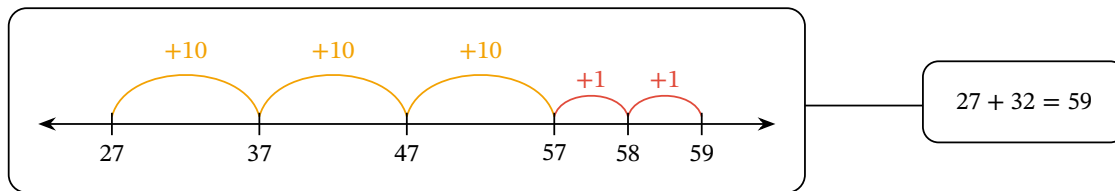
C 51

D 83



Question Video

Q2: Look at how Benjamin added 32 to 27 by adding 3 tens and then 2 ones.




Question Video

Use number lines to find the answers to these sums.

▶


$$43 + 32 = \square$$



- A 75
- B 66
- C 57

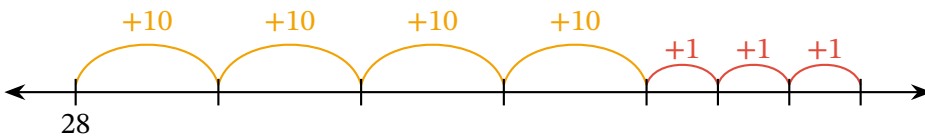
▶

$$67 + 14 = \square$$



- A 81
- B 71
- C 90

**Q3:** Elizabeth is adding using a number line.



► Pick the sum she is working on.

A  $28 + 34$

B  $28 + 43$

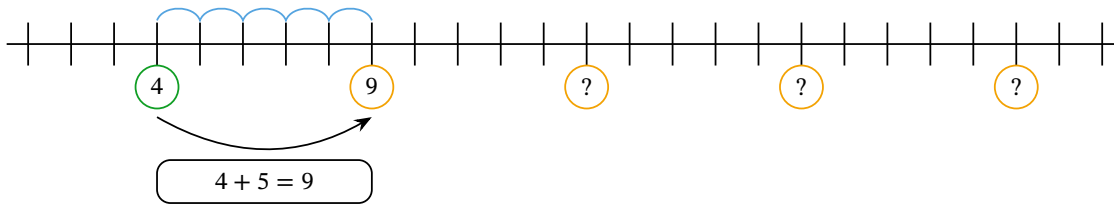
► Find the answer.

A 61

B 62

C 71

**Q4:** Skip count forward by 5s to add 5.



► What is  $9 + 5$ ?

A 15

B 13

C 14

▶ What is  $14 + 5$ ?

A 18

B 20

C 19

▶ What is  $19 + 5$ ?

A 25

B 23

C 24