

# Worksheet: Subtracting Hundreds from Three-Digit Numbers

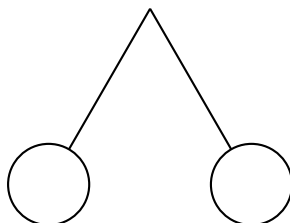


**Q1:** Find the difference by first subtracting hundreds.



Question Video

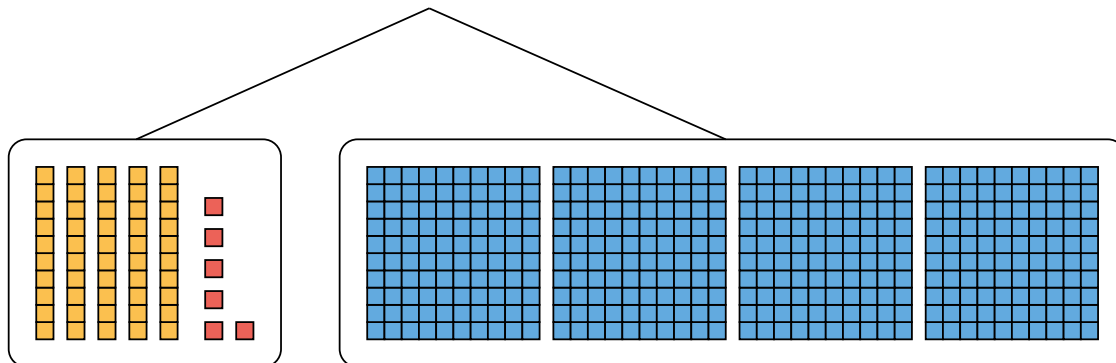
$$741 - 300 = ?$$



- A 711
- B 341
- C 441
- D 541

**Q2:** Look at how Amelia broke apart a number to help her subtract.

$$456 - 200$$

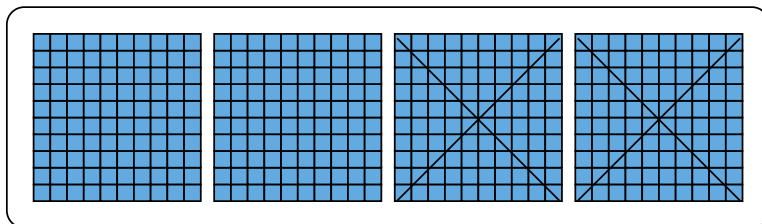
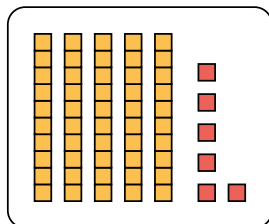


► First, subtract the hundreds.

$$400 - 200 = \underline{\quad}$$

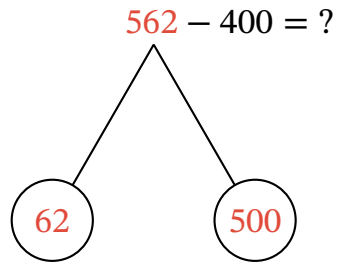
- A 100
- B 200
- C 600
- D 300

► Then, add the remaining hundreds to 56 to find  $456 - 200$ .



- A 156
- B 256
- C 656
- D 356

**Q3:** Look at how James broke apart a number to help him subtract.



► First, subtract the hundreds.

$$500 - 400 = \underline{\quad}$$

- A 200
- B 900
- C 100
- D 300

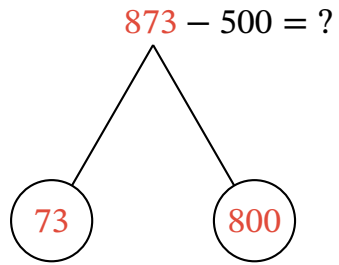
► Then, add the remaining hundreds to 62 to find  $562 - 400$ .

- A 262
- B 962
- C 162
- D 362

**Q4:** Find the difference by first subtracting hundreds.



Question Video



- A 823
- B 273
- C 573
- D 373