


Worksheet: Describing Turns




Q1: The turtle makes a **quarter turn** .




Question Video



Pick his new position.



A



B