

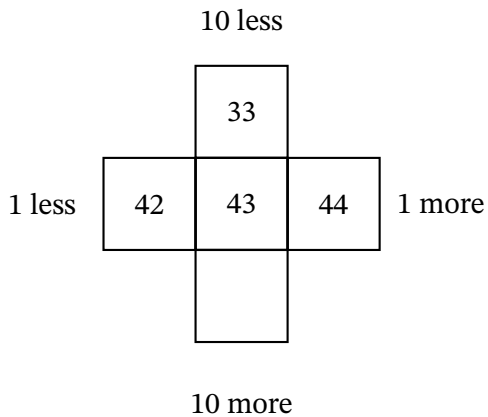
# Worksheet: Adding Tens or Ones on a Hundred Chart



Q1: Which is the missing piece from this part of the 100 square?



Question Video



A  53

B  45

C  54

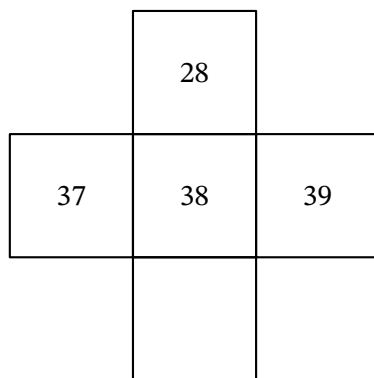
**Q2:** Ten **more** than 29 is \_\_\_\_.

- A 39
- B 19
- C 30



Question Video

**Q3:** Which is the missing piece from the 100 square?



- A 

48
----
- B 

40
----
- C 

49
----

**Q4:** Ten **less** than 85 is \_\_\_\_.

A 84

B 75

C 65

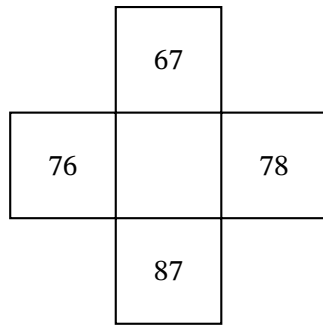
**Q5:** 94 is ten **more** than \_\_\_\_.

A 84

B 104

C 48

**Q6:** Which is the missing piece from the 100 square?



A  77

B  57

C  75

Q7: Find the missing label.

10 Less	Number	
19	29	39

- A 10 More
- B 10 Less
- C 10