

Worksheet: Taking From



Q1: What is $7 - 3$?



Question Video



A 5

B 10

C 4

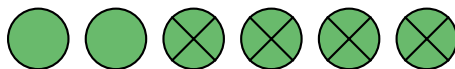
D 2

E 3

Q2: What number is missing?



Question Video



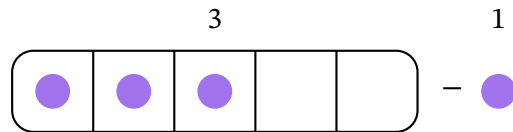
6 take away 4 is

A 3

B 2

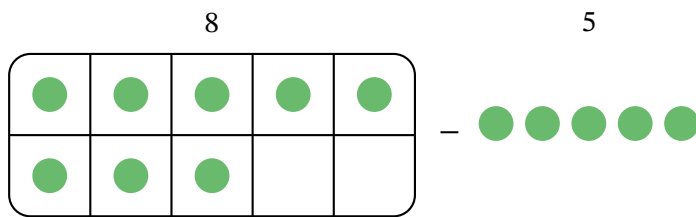
C 4

Q3: What is $3 - 1$?



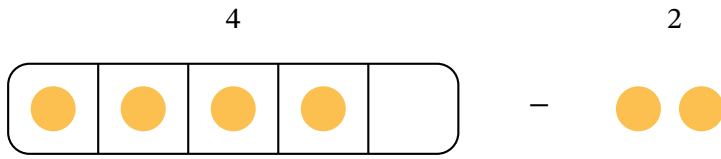
- A 1
- B 4
- C 2

Q4: What is $8 - 5$?

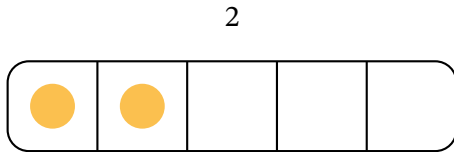


- A 3
- B 4
- C 5

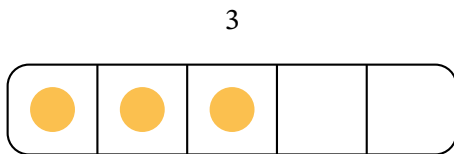
Q5: What is $4 - 2$?



A



B



C

