

Worksheet: Comparing Numbers up to 10 Using Words



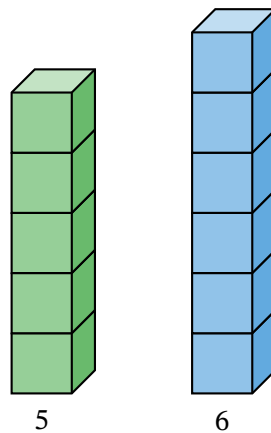
Q1: Which is the smallest number from 5, 6, 4, 3?

- A 6
- B 4
- C 5
- D 3



Question Video

Q2: Compare these numbers. Which is smaller?



- A 6
- B 5

Q3: Is nine less than or greater than three?

A greater

B less



Question Video

Q4: Pick the number that is smaller than 5.

A 7

B 8

C 6

D 4



Question Video

Q5: Which is the greatest number from 3, 4, 2, 1?

A 3

B 2

C 1

D 4

Q6: What number is greater than 6 and less than 8?

- A 7
- B 10
- C 5
- D 9

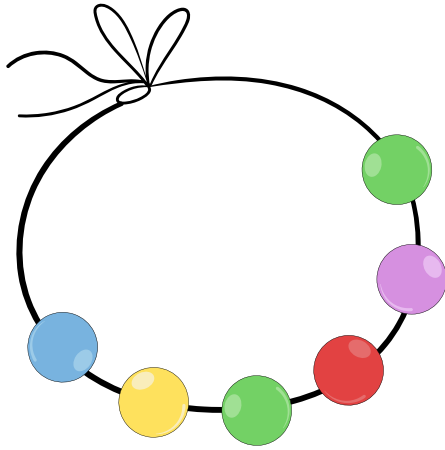
Q7: William has a number of stamps that is less than 6 and more than 4.
How many stamps does William have?

- A 8
- B 3
- C 5
- D 7

Q8: William is 2 years old and Michael is 4 years old. Is William younger or older than Michael?

- A younger
- B older

Q9: Liam makes a band with 6 beads. He wants to make another band but with less than 6 beads.




How many beads could he have?

- A 6, 5, 4, 3, 2, or 1
- B 6, 5, 4, 3, or 2
- C 5, 4, 3, 2, or 1

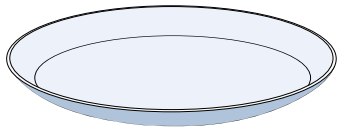
Q10: Which number is smaller than 8 and greater than 6?

- A 5
- B 8
- C 7
- D 9

Q11: William has 7 cookies.



Read the labels on the plates. Which plate should he put them on?



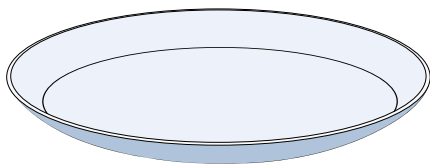
Equal to 7

A



Less than 7

B



Greater than 7

C



Q12: The number 8 is smaller than which of the following?

- A 5
- B 6
- C 7
- D 9

Q13: Complete the following: 4 is greater than ___ and is smaller than ___.

- A 6, 7
- B 5, 6
- C 3, 5
- D 7, 3

Q14: Are there more girls or milk bottles?



A girls

B milk bottles

Q15: Which of the following numbers are greater than 3?

A 4, 5, 6

B 2, 4, 5

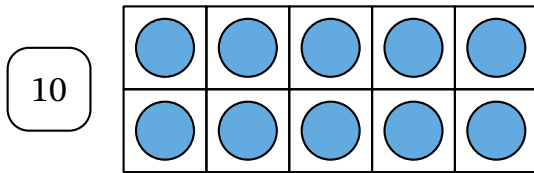
C 2, 4, 6

D 2, 5, 6

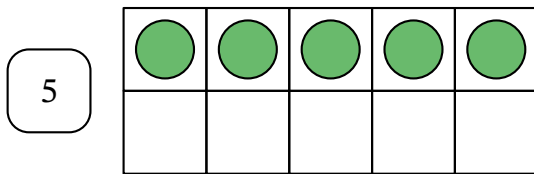
Q16: Which of the following numbers are less than 6?

- A 5, 7, 8
- B 5, 4, 3
- C 5, 4, 7
- D 5, 4, 8

Q17: Pick the bigger number.

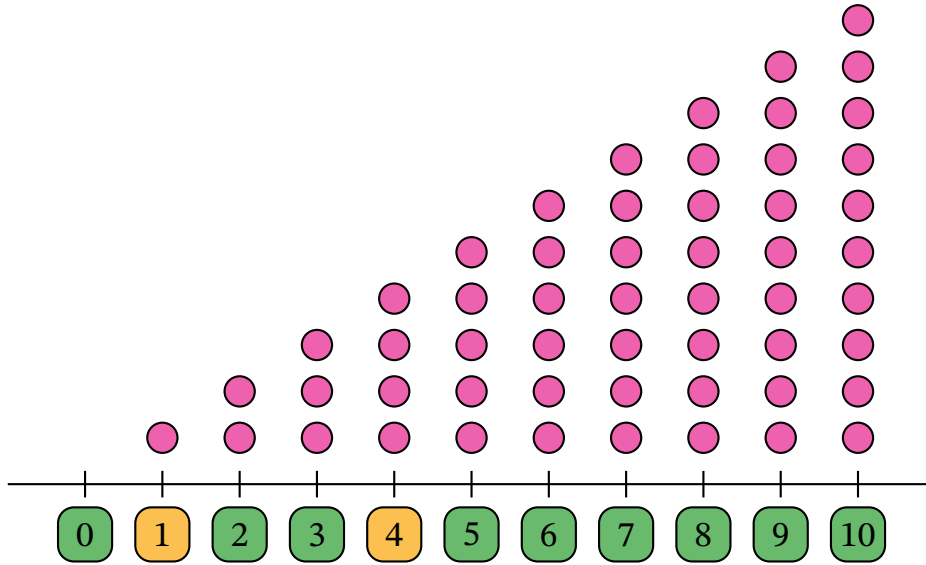


A



B









Q18: Which is less, 1 or 4?




- A 1
- B 4

Q19: Benjamin made a picture graph to show how many children came to the after-school club.

How Many Children in the After-School Club

Boys						
Girls						

 stands for 1 child.

▶ The number of boys is — the number of girls.

A the same as

B less than

C more than

▶ How many boys are there?

A 4

B 3

C 8